

# Maths Meeting Wednesday

6.1.21

# Wednesday


- $4 \times 10 = .$ 
  - 40
- What is 10 less than 90?
  - 80
- If I have £24 to share between my friend and I how much will we each have?
  - £12

1

Carl has some marbles.

He gives 4 to his friend and now he has 3 left.


How many marbles did Carl start off with?



r

1

Carl has some marbles.  
He gives 4 to his friend and now he  
has 3 left.  
How many marbles did Carl start  
off with?




Answer

7

Ajay has **30** pencils.

He shares them equally between **3** pots.



Complete the number sentence to show how Ajay shares the pencils.

$$\boxed{\phantom{00}} \div \boxed{\phantom{00}} = \boxed{\phantom{00}}$$

Write a fact family to match the model.



$$\square + \square = \square$$

$$\square - \square = \square$$

$$\square + \square = \square$$

$$\square - \square = \square$$

Write a fact family to match the model.



$$7 + 3 = 10$$

$$10 - 3 = 7$$

$$3 + 7 = 10$$

$$10 - 7 = 3$$

Answer

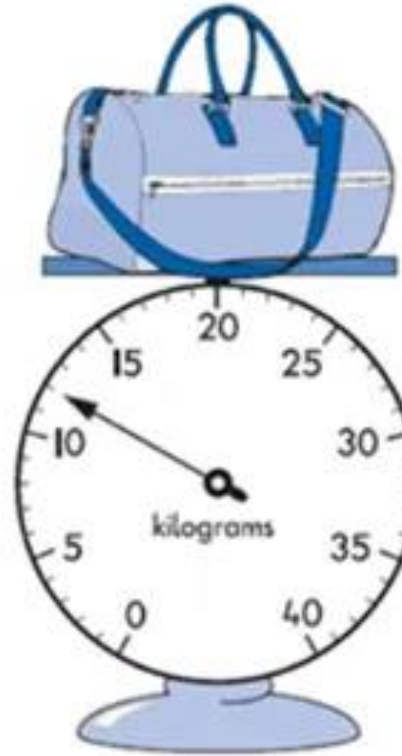


# Read the scales.

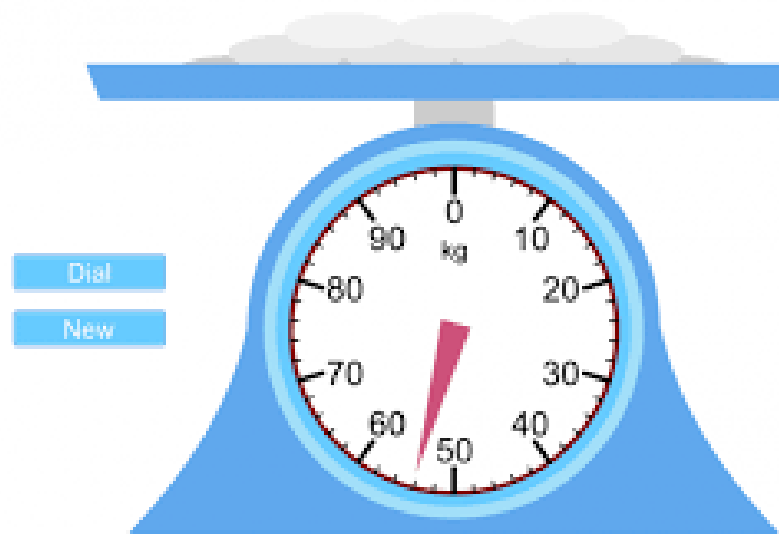
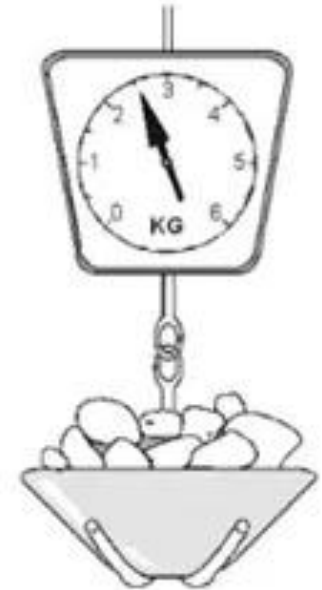
How heavy is Peter?



How much does the bag weigh?



How much do the potatoes weigh?





Count in twos to find the total  
numbers of eyes.



Count in twos to find the total numbers of eyes.

2



14


Answer

Look at the array. What could the multiplication number sentence be?

Write it down.

Is there another way you could write the number sentence?

How many pears are there?



# Time for a song

<https://www.youtube.com/watch?v=V96IZWctZYA>

