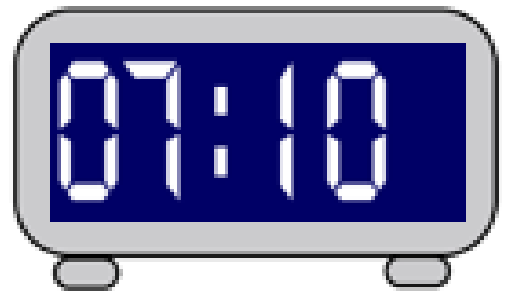
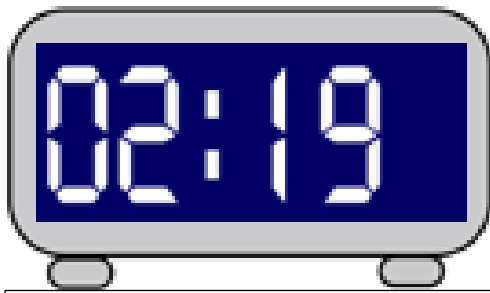
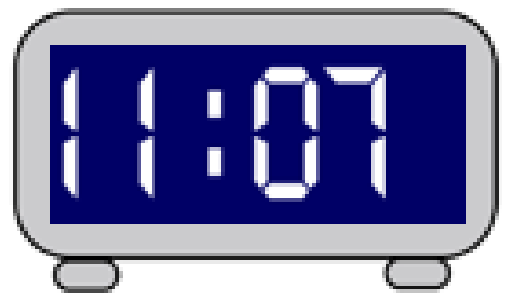




Five thirteen



I will know how to tell the time using 'minutes past' on a digital clock 3.3.21



State how many minutes have passed since _____ o'clock

Use your analogue clock to show this time and find the matching clock face

Draw a line to the matching clock face and write the time in words in the space

Example:

Seventeen minutes

past eleven

